




Name _____

Datum _____

Hast Du alles behalten?

1. Ein Notensystem hat _____ Linien und _____ Zwischenräume.


2. Numeriere die Notenlinien,




Numeriere die Zwischenräume.



3. Wie heißt dieser Notenschlüssel? 



4. Trage die Namen der Noten ein.



5. Schreibe die Noten über die Namen.

The first staff contains a single note on the first line (C4) with the letter 'c' below it. The second staff contains a sequence of notes: a half note on the first line (C4), a quarter note on the first space (F4), a quarter note on the second line (D4), a quarter note on the second space (H4), a quarter note on the third line (G4), a quarter note on the third space (C5), a quarter note on the fourth line (E5), and a quarter note on the fourth space (C5). Below each note is its corresponding letter name: a, f, d, h, g, c, e, c.

6. Nenne diese Zeichen:

The first staff shows a bar line with a handwritten drawing of glasses above it and three arrows pointing to the bar line. The second staff shows a double bar line with three arrows pointing to it. The third staff shows a repeat sign with three arrows pointing to it. To the right of each staff is a blank line for the student to write the name of the symbol.

7.

Kannst du die Notenrätsel lösen?
In den Noten sind Wörter versteckt.

The first staff has notes on the first line (C4), first space (F4), second line (D4), and second space (H4). Below the notes is a blank line with the letter 'F' written under the first space. The second and third staves have notes on the first space (F4), second line (D4), second space (H4), and third line (G4). Below each staff is a blank line for the student to write the hidden word.